



## How Many Corners to Each Shape?



0 corners

as

3 corners

as

4 corners

as

5 corners

as


6 corners

Related Factor = \_\_\_\_\_ has \_\_\_\_\_ corners

triangle



pentagon



circle



hexagon



square

