
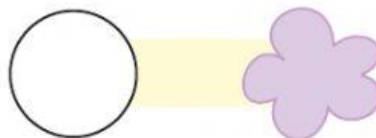
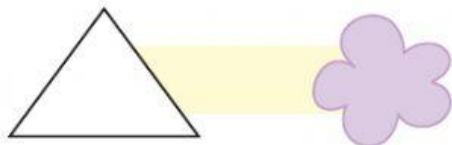




## Data Handling



Count the shapes in the above picture.



Name the shapes  
that occurs the most

that occurs the least





These children are friends.

Count the number of letters in each name-word.

Names						Number of letters
S	A	L	M	A		<input type="text"/>
J	O	S	E	P	H	<input type="text"/>
A	R	U	N			<input type="text"/>
C	H	I	N	T	U	<input type="text"/>
G	E	E	T	A		<input type="text"/>
A	S	H	A			<input type="text"/>
S	U	B	B	U		<input type="text"/>
A	H	M	A	D		<input type="text"/>
R	A	V	I			<input type="text"/>

How many names have four letters

How many names have five letters

How many names have six letters

How many times **S** comes in all the names taken together

How many times **A** comes in all the names taken together