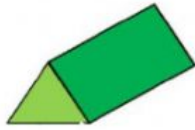
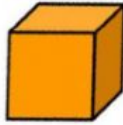


Name:

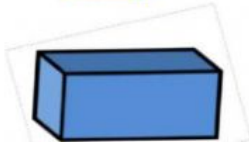
1. Match with the name of prisms



square prism



rectangular prism



triangular prism

Fill in the blanks

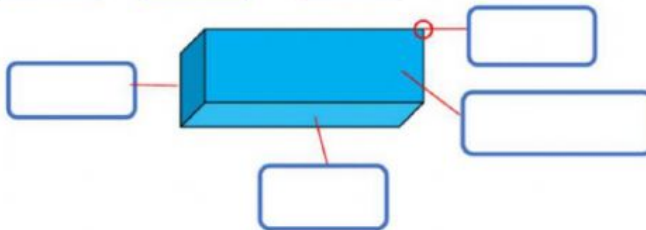
- 2.

vertex

edge

base

flat surface



3. The point where two edges on a polygon or polyhedron meet
vertex line side

4. A cylinder is an example of a non-polyhedron
True False



Q5. What is the name of this 3D shape ?

cube

cuboid

tetrahedron

prism

6. A solid having four plane triangular faces; a triangular pyramid.
Tetrahedron sphere cube



How many **vertices** on a **tetrahedron**
(triangular-based pyramid)...

- 7.

4

5

6

3