


## DECINE E UNITA'

Mara e Francesco raccolgono ogni giorno tanti fiorellini e li contano aiutandosi con l'abaco.

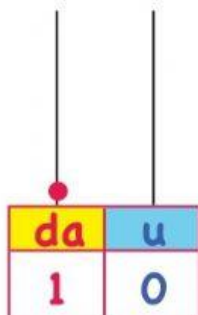
Conta le unità e le decine sugli abachi e scrivi il numero risultante. Scrivilo anche in parola.

In quale giorno hanno raccolto il maggior numero di fiori? .....

In quale giorno hanno raccolto il minor numero di fiori? .....



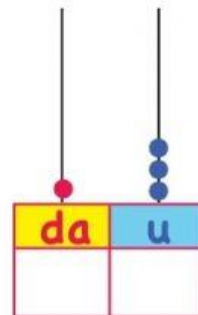
**LUNEDI'**



**DIECI**

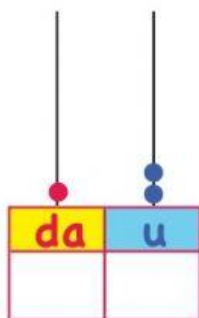
.....

**MARTEDI'**



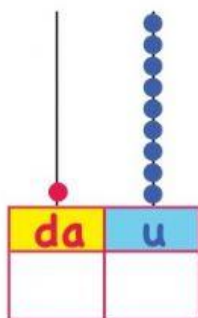
.....

**MERCOLEDI'**



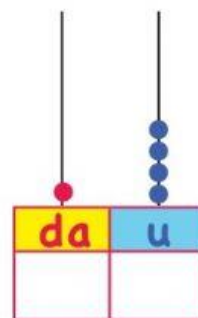
.....

**GIOVEDI'**



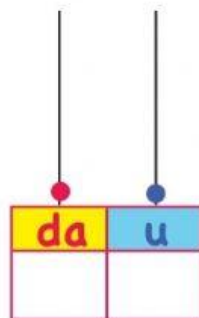
.....

**VENERDI'**



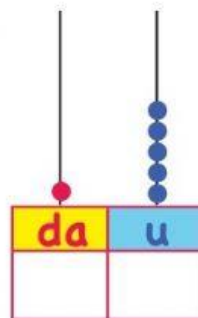
.....

**SABATO**



.....

**DOMENICA**



.....