



Triangle


Choose the correct pronunciation



Choose the objects with the shape of triangle



Count the sides of the shape and select the correct number



1

2

3

Triangle

Look at the picture and then answer the questions



How many triangles are there?

6

7

8

How many circles are there?

4

7

3