

Reformed Pearson Edexcel Functional Skills Entry 2

Section B – Calculator

Mathematics

Practice Paper

For first teaching September 2019

Time: 65 minutes



Candidate name

Candidate signature

Date

You must have a

- black or blue ink pen
- pencil
- ruler
- rubber
- calculator.

Instructions

- Answer every question.
- You can write or draw to show your answers.
- You may use a calculator.

Information

- The total number of marks for this section is 21.

Advice

- Read each question carefully.
- Check your work at the end.
- Ask if you do not understand any words.

Turn over ►

W64156A

©2019 Pearson Education Ltd.

1/1/1/1/1




Pearson


- 1 Lucy wants to wake up before seven o'clock.

What time will Lucy set her alarm clock to?

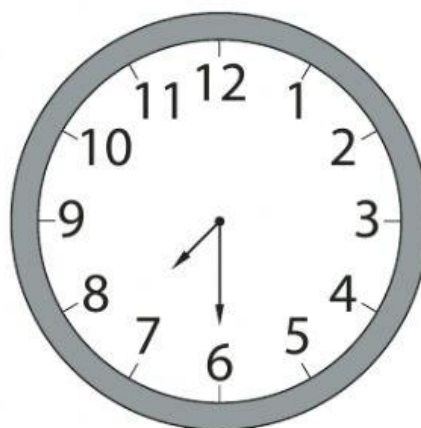
(1)

☐


Tick (✓) the correct answer.



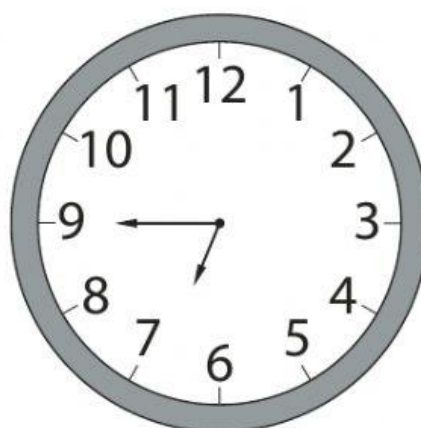
()



()



()



()

2 Lucy looks at the waiting times for buses.

Waiting times for buses

Bus 2 to town centre	3 minutes
Bus 4 to station	20 minutes
Bus 5 to town centre	7 minutes
Bus 7 to town centre	18 minutes
Bus 8 to station	9 minutes
Bus 11 to airport	6 minutes
Bus 13 to station	14 minutes

Lucy takes a bus to the station.

She takes the bus with the least waiting time.

Which bus does Lucy take?

(1)

Show your answer here.

3 Lucy compares the costs of rail and bus tickets.

The chart shows the cost of rail tickets.



Lucy pays £11 for an adult week bus ticket.

How much less does Lucy pay for an adult week bus ticket than an adult week rail ticket?

(1)

Show your answer here.

£ _____

4 Lucy pays for her travel.

She works out how much money is left over.

She does this calculation.

$$154 - 29 \quad \square \quad 125$$

What is the missing symbol?

(1)

Tick (✓) the correct answer.

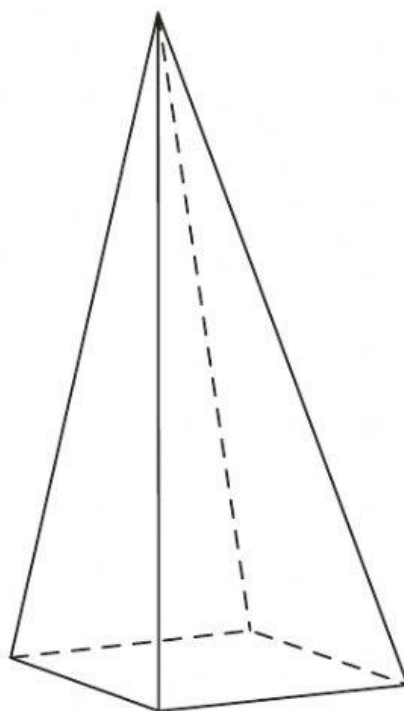
()

()

()

()

- 5** Lucy sells lamps in the shape of a pyramid.



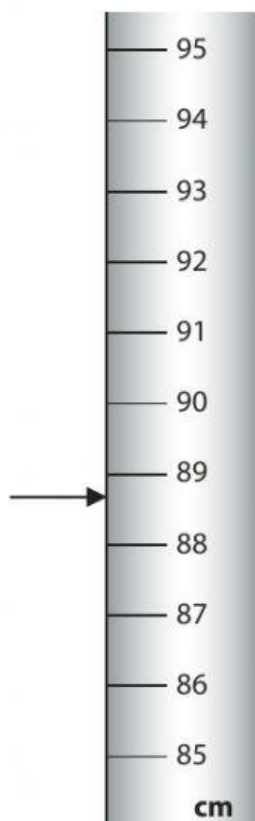
How many corners does the base of the pyramid have?

(1)

Show your answer here.

6 Lucy puts a lamp into a box.

The arrow shows how tall the lamp is.



The box is 6 cm taller than the lamp.

How tall is the box to the nearest division?

Use the correct unit.

(3)

Show your answer here.

7 Lucy sells a table.


The top of the table is a hexagon.

Which shape is a hexagon?

(1)

☐

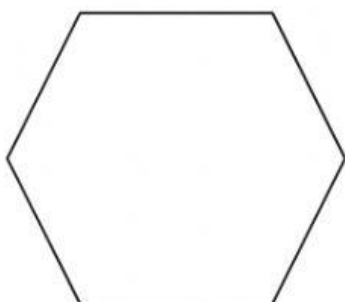
Tick (✓) the correct answer.



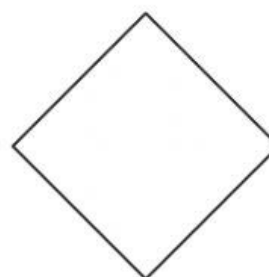
()



()



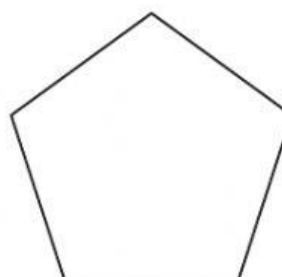
()



()



()



()

8 Lucy puts one box on a trolley.

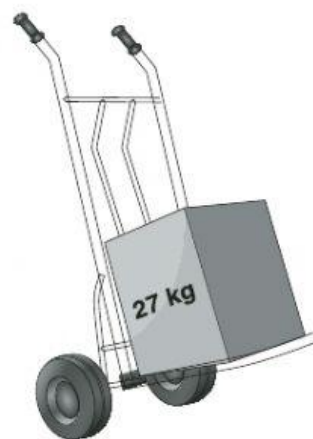
The box on the trolley has a weight of 27 kg.

The most weight the trolley can take is 50 kg.

She has another box with a weight of 19 kg.

Can the trolley take the weight of both boxes?

Show why you think this.



(2)

☐

Show your working and your answer here.

Tick (✓) the correct answer.

Yes () No ()

9 (a) Round 27 to the nearest 10

(1)

☐

Show your answer here.

(b) Use the rounded number to check your answer to question 8

(1)

☐

Show your check here.