

# Our Neighboring Country India

1. Locate Nepal, India and China in the map given below. [1.5]



2. Give one word answer: [6]





- a. The capital city of India. \_\_\_\_\_
- b. Indian region bordering Nepal. \_\_\_\_\_
- c. Sanskrit name of India \_\_\_\_\_
- d. Independence day \_\_\_\_\_
- e. Largest desert in India \_\_\_\_\_
- f. Currency of India \_\_\_\_\_

3. Name the following: [2x2=4]

a. Two national festivals of India


b. Two important rivers of India


4. Identify the following: [2]

Ashoka Pillar	Prithivi Narayan Shah
Mahatma Gandhi	Taj Mahal

5. India is the second largest populous country after \_\_\_\_\_.[0.5]

6. National animal of India is \_\_\_\_\_.[0.5]

7. National fruit of India is \_\_\_\_\_.[0.5]

8. What are the major exports of India? [2]

9. If you have 500 Indian rupees, how many Nepalese rupees will you get when you exchange it? [2]