

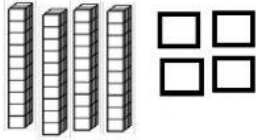
Mathematics HW

Tens and Ones Forty Family Numbers



Instructions: Type how many tens and ones.

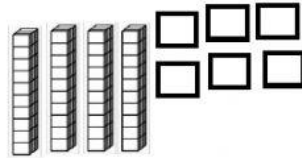
A.



| Tens | Ones |
|------|------|
| | |

= _____

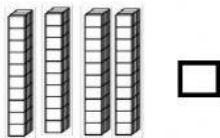
B.



| Tens | Ones |
|------|------|
| | |

= _____

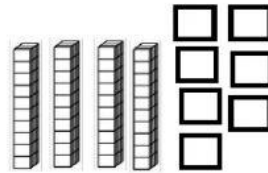
C.



| Tens | Ones |
|------|------|
| | |

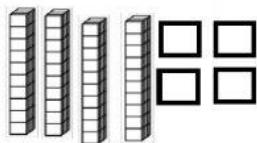
= _____

D.



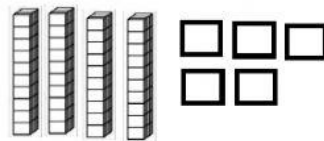
| Tens | Ones |
|------|------|
| | |

= _____



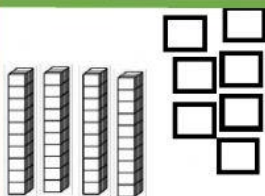
E.

_____ tens _____ ones = _____



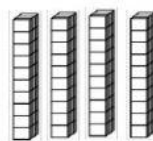
F.

_____ tens _____ ones = _____



G.

_____ tens _____ ones = _____



H.

_____ tens _____ ones = _____