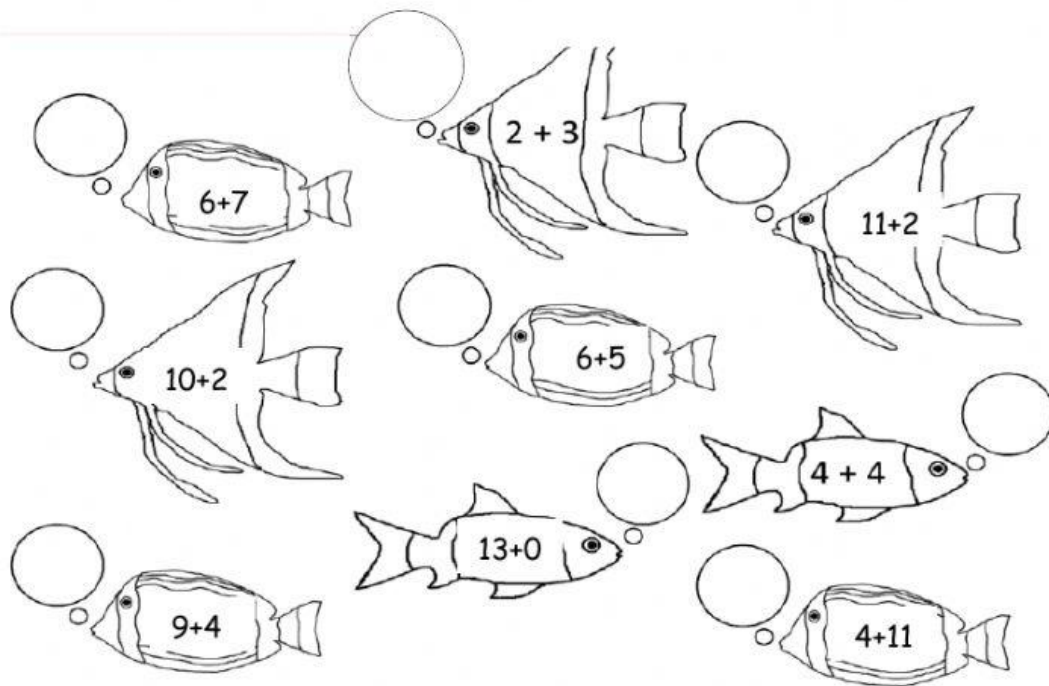


Friday 22<sup>nd</sup> January, 2021

Term 2

Weekly Test 1- Mathematics

Select all the fish that makes 13.



Solve the word problems.


Ryan has 0 crayons.

Miss gave him a box of 13 crayons.


How many crayons does Ryan have now?

\_\_\_\_\_ + \_\_\_\_\_ = \_\_\_\_\_



Zendaya has 4 chocolate donuts. 

Cataleya has 6 vanilla donuts. 

Kayla has 3 strawberry donuts. 

Who has the **most** donuts? \_\_\_\_\_

Who has the **least** donuts? \_\_\_\_\_

How many donuts are there **altogether**?

\_\_\_\_\_ + \_\_\_\_\_ + \_\_\_\_\_ = \_\_\_\_\_

Khertima has 1 coloured pencil.  
Her sister gave her more coloured pencils.  
Then Khertima had 13 coloured pencils **in all**.  
How many coloured pencils did her sister give her?



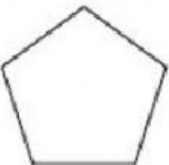
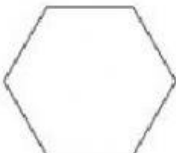



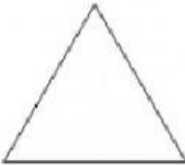

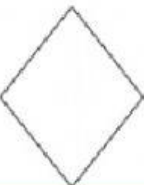

1 + \_\_\_\_\_ = 13

Ché has 8 dogs at home.  
His daddy gave him more dogs.  
Then Ché had 13 dogs **in all**.  
How many dogs did his daddy give him?



8 + \_\_\_\_\_ = 13

Select the correct name for each shape.

 <input type="text"/>	 <input type="text"/>	 <input type="text"/>
 <input type="text"/>	 <input type="text"/>	 <input type="text"/>
 <input type="text"/>	 <input type="text"/>	 <input type="text"/>

Count and write the number for each shape.

