

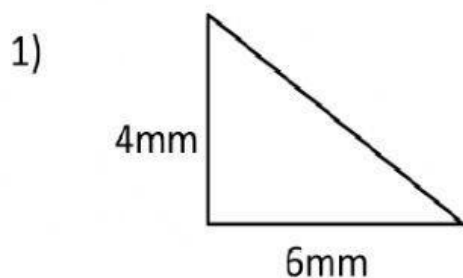
Name _____

Date _____

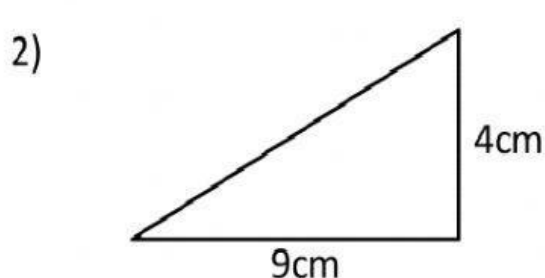


TRIANGLE AREA SHEET 2

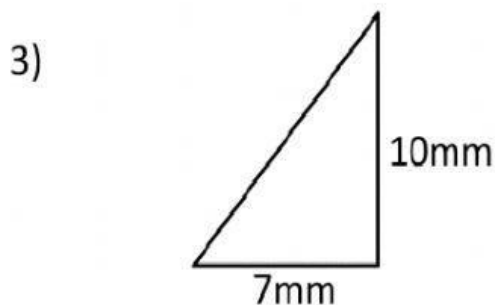
Work out the area of the following right angle triangles by halving the area of the rectangle formed by its perpendicular sides. They are not drawn to scale.



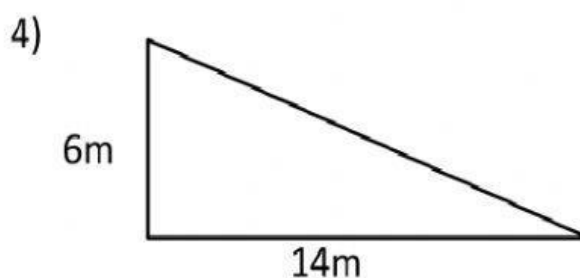
Area = _____ mm²



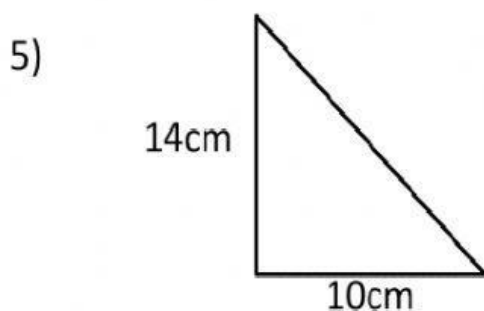
Area = _____ cm²



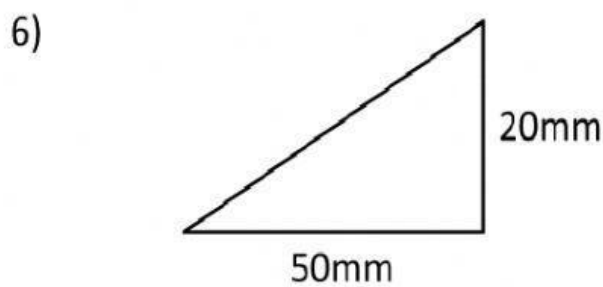
Area = _____ mm²



Area = _____ m²



Area = _____ cm²



Area = _____ mm²

Handy hint:

The formula for the area of a triangle is $\frac{1}{2} \times \text{base} \times (\text{perpendicular}) \text{ height}$



Free Math Sheets, Math Games and Math Help

MATH-SALAMANDERS.COM