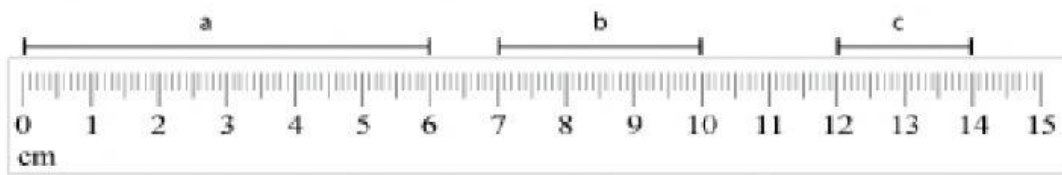
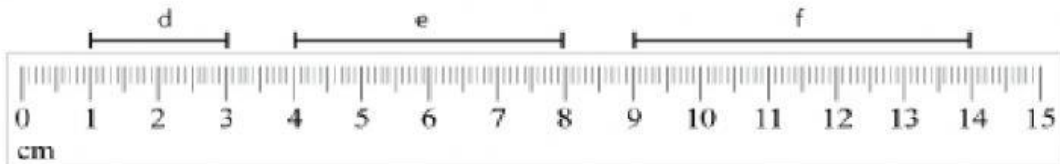


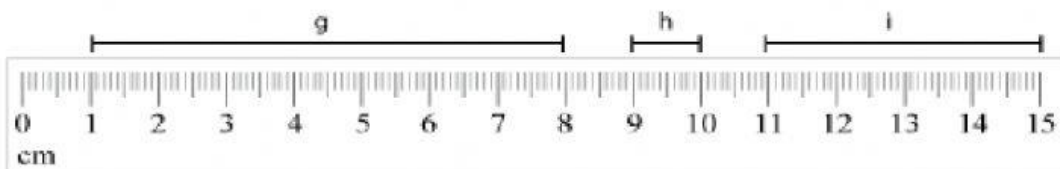
Measure the following line segments in cm using the scale provided.



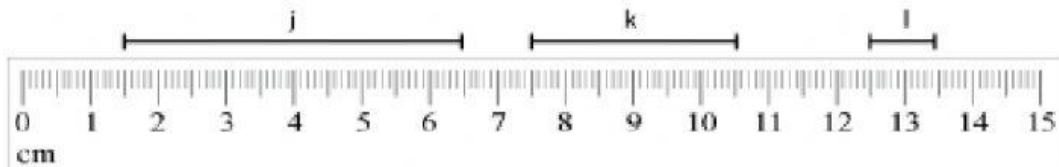
a = \_\_\_\_\_ cm      b = \_\_\_\_\_ cm      c = \_\_\_\_\_ cm



d = \_\_\_\_\_ cm      e = \_\_\_\_\_ cm      f = \_\_\_\_\_ cm



g = \_\_\_\_\_ cm      h = \_\_\_\_\_ cm      i = \_\_\_\_\_ cm



j = \_\_\_\_\_ cm      k = \_\_\_\_\_ cm      l = \_\_\_\_\_ cm