













Name _____

Date _____



ADDITION & SUBTRACTION PROBLEMS TO 15 SHEET 3

		WORKING OUT
1)	There are 13  . 6  fly away. How many are left? _____	
2)	A shop sells 5  on Monday. It sells 3  on Tuesday and 4  on Wednesday. How many altogether? _____	
3)	There are 15  . 8  are cut down. How many are left? _____	
4)	There are 11  . 4 more  come along. How many are there in total? _____	
5)	Captain has 6  . Newton has 3  . Sally has 5  . What is the sum? _____	