




Caterpillar addition to 10

Count the number of bugs and add them together. Drag your answer to the correct box.

 $+$  $=$

 $+$  $=$

 $+$  $=$

 $+$  $=$

 $+$  $=$

7

10

8

10

9