

Des additions équilibrées

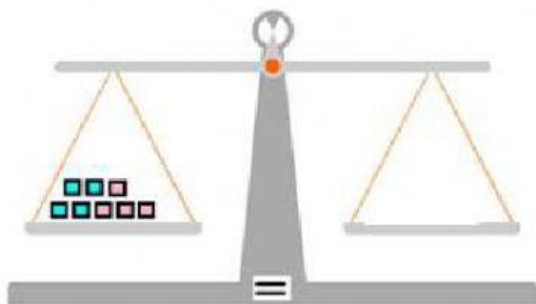
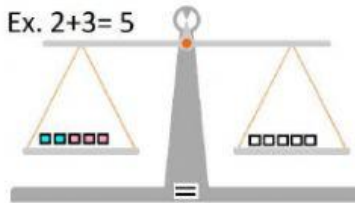
Pour chaque situation :

-mets la balance en équilibre en plaçant les cubes manquants à la bonne place.

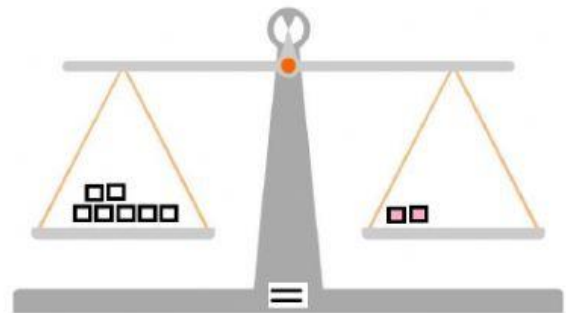
-écris la valeur du terme manquant.



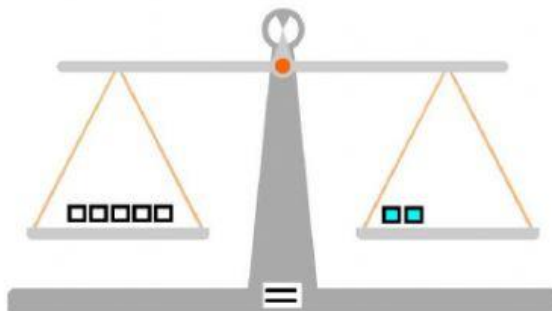
Ex. $2+3=5$



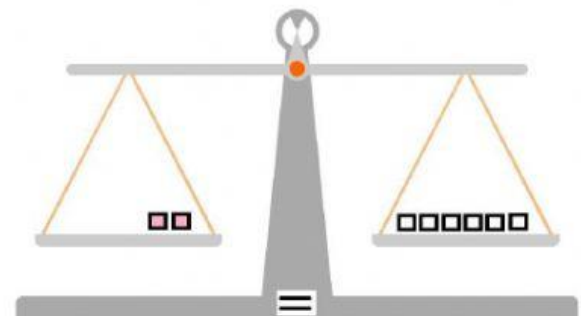
$$4 + 4 = \underline{\quad}$$



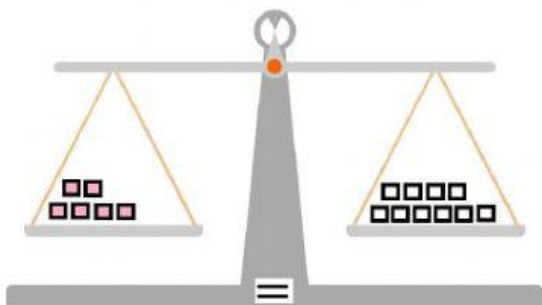
$$7 = 2 + \underline{\quad}$$



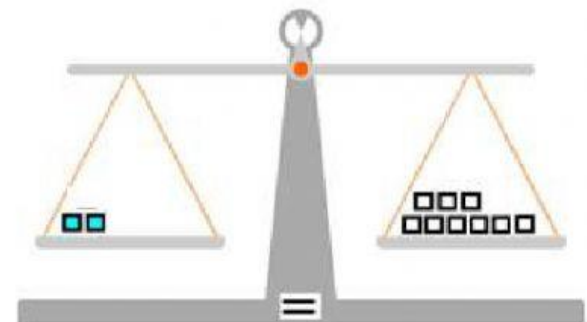
$$5 = 2 + \underline{\quad}$$



$$\underline{\quad} + 2 = 6$$



$$6 + \underline{\quad} = 10$$



$$2 + \underline{\quad} = 9$$