

THE RESPIRATORY SYSTEM

1. Watch the video "[The Respiratory System and Respiration](#)" and complete the following activities.

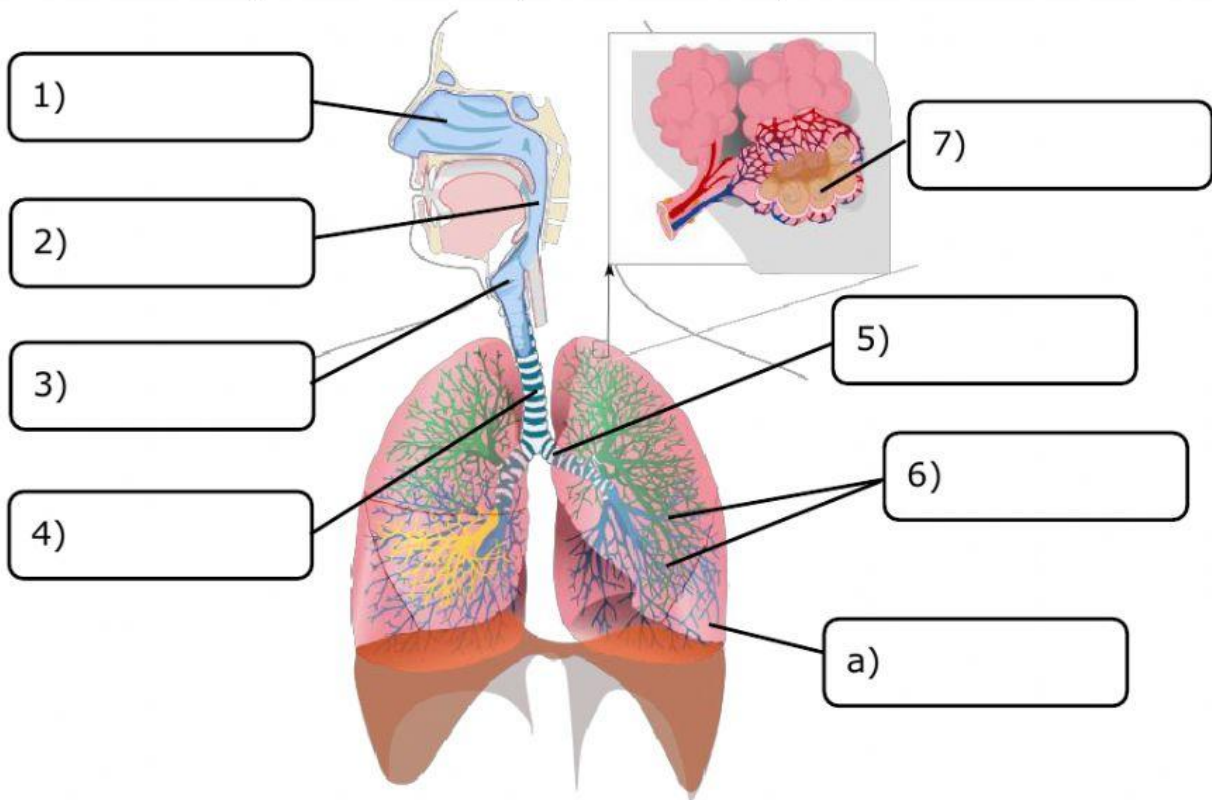
1.1. Answer the questions using the words provided in the box.

oxygen	involuntary	carbon dioxide
--------	-------------	----------------

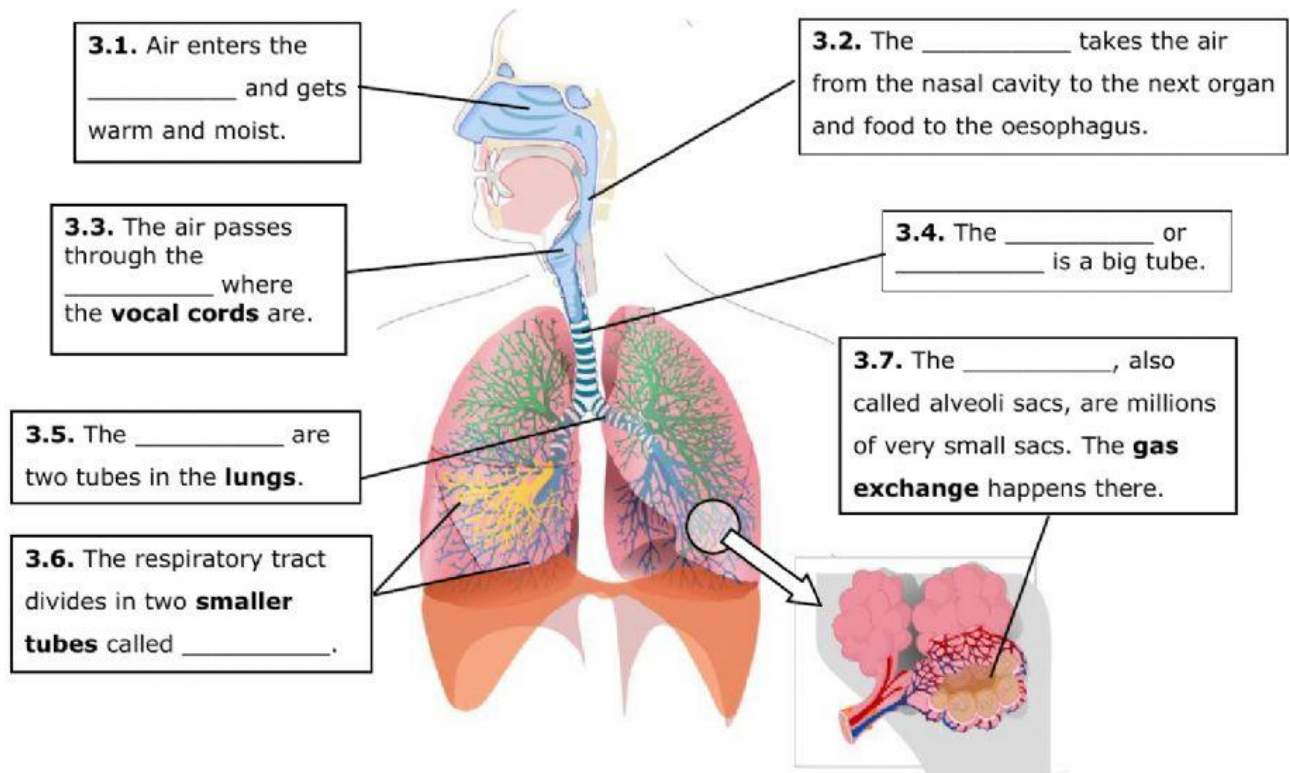
- a) What gas does human being **take in** when we breathe?
We **inhale** _____.
- b) What gas does human beings **eliminate** during respiration?
We **exhale** _____.
- c) Is **respiration** a voluntary or involuntary movement?
It is an _____ movement.

1.2. Name the organs of the respiratory system.

Nose	Bronchioles	Larynx	Trachea or windpipe
Bronchi	Pharynx	Lungs	Alveolar sacs or alveoli



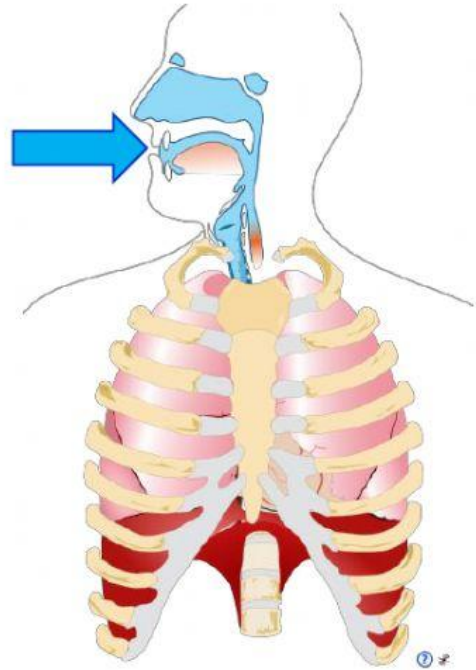
2. Complete the definitions by writing the organs of the respiratory system.



3. Choose the correct answer and copy it the box.

INHALATION

- We breathe **in/out** (1)_____ air.
- Our lungs get **smaller/bigger** (2)_____.
- We inhale **oxygen/carbon dioxide** (3)_____.
- The air passes to our **lungs/blood** (4)_____ and then our **lungs/blood** (5)_____.



EXHALATION

- We breathe **in/out** (6)_____ air.
- Our lungs get **smaller/bigger** (7)_____.
- We exhale **oxygen/carbon dioxide** (8)_____ because our body doesn't need it.

