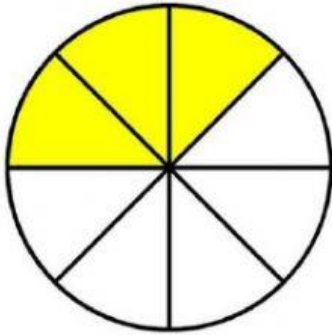
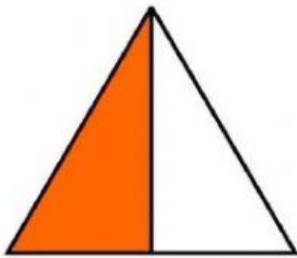


LEMBAR KERJA PESERTA DIDIK

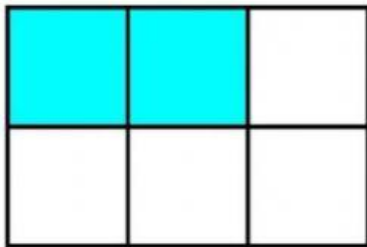
Pasangkanlah nilai pecahan sesuai gambar yang tersedia dengan cara tarik garis!



$$\frac{3}{15}$$



$$\frac{4}{5}$$



$$\frac{1}{2}$$



$$\frac{3}{8}$$



$$\frac{2}{6}$$