

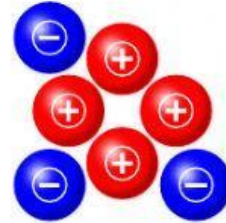
Electrical Charges

If an object has more positive charges (⊕) than negative charges (⊖), its electrical charge is positive (⊕).

If an object has more negative charges (⊖) than positive charges (⊕), its electrical charge is negative (⊖).

If an object has the same number of positive (⊕) and negative (⊖) charges, it has no electrical charge or is neutral.


Example:



Electrical charge: positive charge

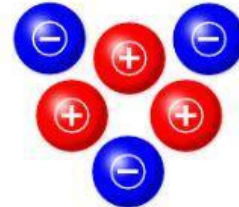
Count the positive and negative charges in each picture. Write positive charge, negative charge, or no charge on each line.

1.



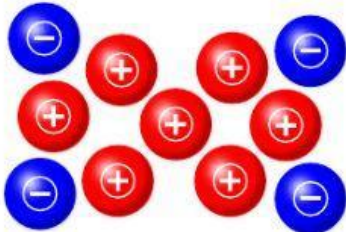
electrical charge: _____

2.



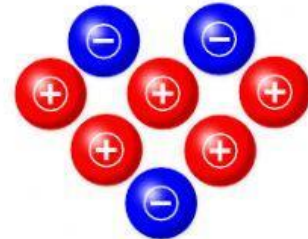
electrical charge: _____

3.



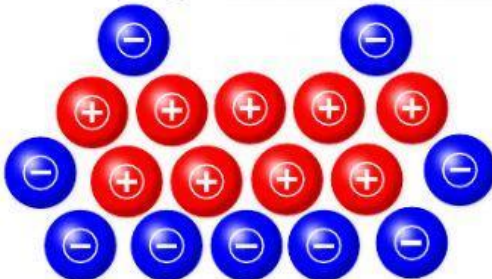
electrical charge: _____

4.



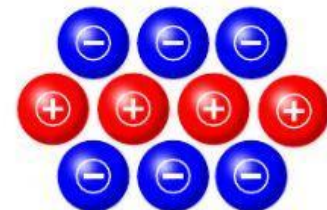
electrical charge: _____

5.



electrical charge: _____

6.



electrical charge: _____