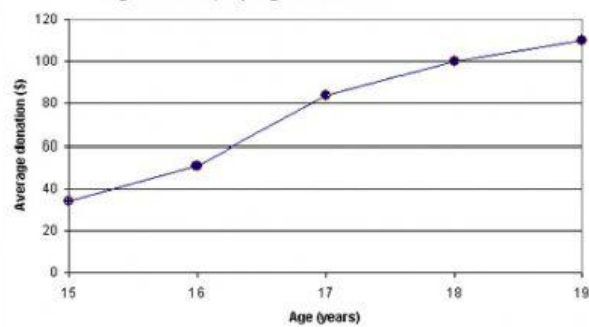


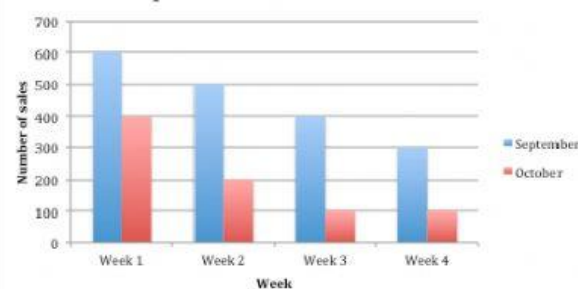
Figure 2. Average number of dollars donated at Evergreen High School, by age of donor



(1) What trend do you see?

- a) The average donation increase as the age of donor decreases.
- b) The average donation does not change based on age of donor.
- c) The average donation decreases as the age of donor increases.
- d) The average donation increases as the age of donor increases.

September and October Sales



(2) What trends do you see? Select all that are correct.

- a) Sales in September decreased each week.
- b) Sales were higher in October than in September.
- c) Sales in October decreased each week.
- d) Sales were lower in October than in September.

Pie chart

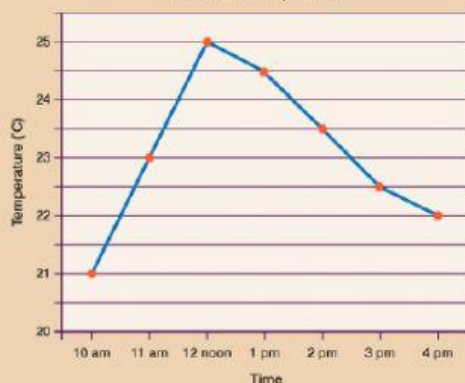
Favorite Magazines



(3) What trends do you see in the pie chart? Select all that are correct.

- a) The popularity of 'One to One' magazine decreased each year.
- b) The popularity of all magazines increased each year.
- c) 'Kingdom' magazine increased by the largest percentage from 2012 to 2014.
- d) 'Effort' magazine didn't change.

Greenhouse temperature



(4) What trends do you see in the pie chart? Select all that are correct.

- a) The temperature increases through the entire day.
- b) The peak greenhouse temperature is at noon.
- c) Temperatures steadily decrease after 12:00
- d) Temperatures stay the same between 1:00 and 2:00
- e) Temperatures increase at a constant rate from 10:00 am to noon.

