


## Name the Notes


1. Name the notes in this musical scale.




2. Name only the notes that are written on the lines of the music stave.



3. Name only the notes that are written in the spaces of the music stave.



4. What word do these notes spell out?



5. What sentence does this set of notes spell out?

