
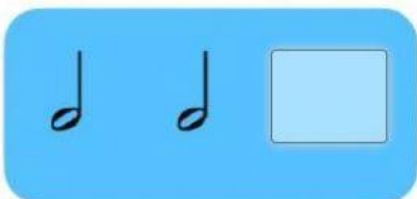
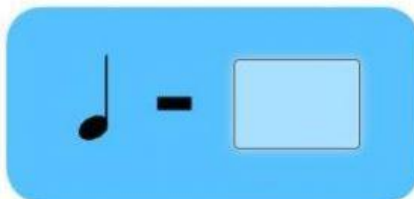


1.-ESCRIBE EL COMPÁS QUE CORRESPONDA EN CADA ESQUEMA RÍTMICO:
2/4, 3/4 O 4/4



2.- ESCRIBE EL NOMBRE DE LAS NOTAS



3.- SUMA LAS SIGUIENTES FIGURAS

$$\text{Quarter note} + \text{Half note} + \text{Quarter note} = \text{Blue oval}$$

$$\text{Quarter note} + \text{Quarter note} + \text{Half note} = \text{Blue oval}$$

$$\text{Whole note} + \text{Quarter note} + \text{Half note} = \text{Blue oval}$$

$$\text{Quarter note} + \text{Quarter note} + \text{Quarter note} = \text{Blue oval}$$

$$\text{Whole note} + \text{Quarter note} + \text{Quarter note} = \text{Blue oval}$$