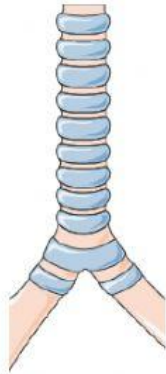
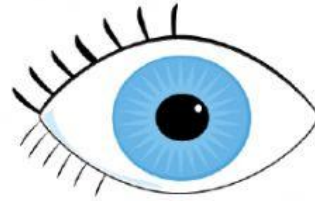
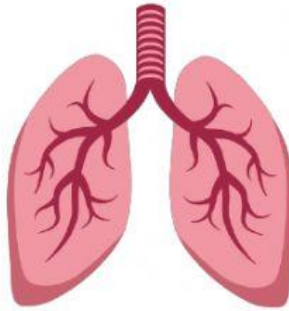


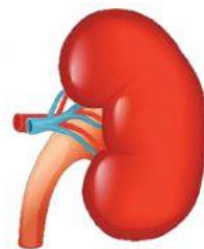
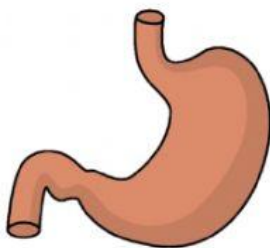
## Worksheet

### The Respiratory System and The Digestive System

1- Select the organs that belong to the respiratory system:



2- Select the organs that belong to the digestive system:



**3- Read the following sentences and answer by true or false:**

- Our lungs extend when we breathe in. True False
- Our eyes are part of the respiratory system. True False
- The intestines are part of the digestive system. True False
- We breathe OUT the oxygen. True False
- Our lungs belong to the respiratory system. True False
- The heart is part of our digestive system. True False
- Food enters our body through our nose. True False

**4- Cross out (select) the words that do not relate to the rest:**

➤ Intestines – Stomach – Heart – Food Tube

➤ Nose – Anus – Wind Pipe – Lungs

**5- Through which part of our body does the air enter into our lungs?** \_\_\_\_\_

**6- Through which part of our body does the food enter into our stomach?** \_\_\_\_\_

7- Label the following diagrams:

