


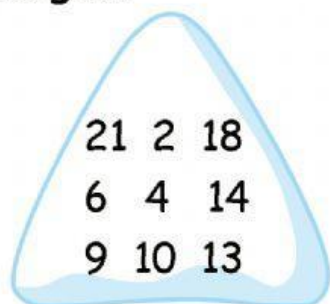
Counting in steps of 2, 4 and 8



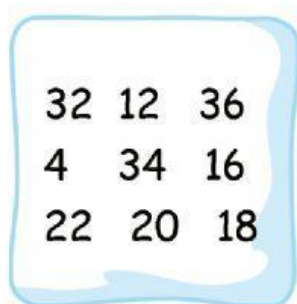
1. Write the missing numbers

- a. 2, 4, __, 8, __, __, __, __, 18, __, __, 24
- b. 4, __, __, 16, __, __, __, __, 36, __, 44, __
- c. 8, __, 24, __, __, __, 56, __, __, __, 88, __

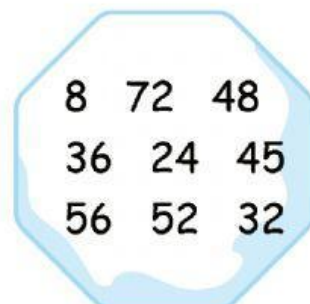
2. Find the multiples of each number and write them in order, smallest to largest



a. multiples of 2



b. multiples of 4



c. multiples of 8

- a. _____
- b. _____
- c. _____

3. Read each clue to find the number

- a. We are multiples of 2, 4 and 8. We are between 20 and 50.

We are _____, _____, _____, _____

- b. I am a multiple of 2, 4 and 8. I am less than 40. I have a 3 in the 10s place. I am _____

- c. I am a multiple of 2, 4 and 8. I am also a multiple of 3.

I am less than 40. I am _____

- d. I am a multiple of 2 and 4. I am between 5 and 10.

I am _____

- e. We are the multiples of 2, 4 and 8. We are between 60 and 79.

We are _____, _____

- f. I am a multiple of 2, 4 and 8. I am more than 40. I have 4 in the 10s place. I am _____