









ADDITION (+)

Q1. Count the pictures and write the answer in the box.

1.  +  =

2.  +  =

3.  +  =

4.  +  =

Q2. Add the following:

1.
$$\begin{array}{r} 70 \\ 5 \\ + 2 \\ \hline \end{array}$$

2.

T	O
3	
+	5
<input type="text"/>	

3.

T	O
4	
+	3
<input type="text"/>	

4.

T	O
9	
+	0
<input type="text"/>	

5.

T O

6

+ 1

6.

T O

8

+ 1