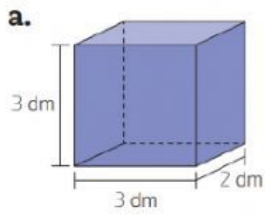
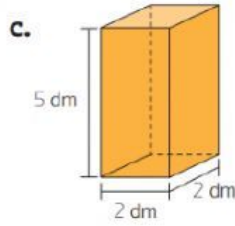


NAME: _____

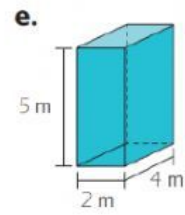
1. Calculate the volume (V) of the figures.



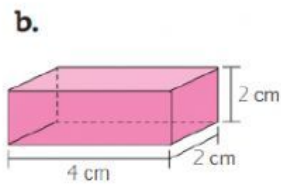
$V =$ _____



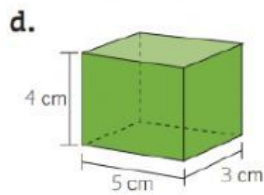
$V =$ _____



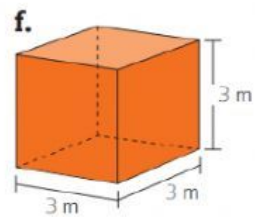
$V =$ _____



$V =$ _____



$V =$ _____



$V =$ _____

2. Solve the word problems.

- a. How many cubic meters (m^3) does a pool with the dimensions shown in the figure have? How many liters of water can it contain?

