


# LITTLE STAR SCHOOL

## SUMMATIVE ASSESSMENT TEST







CLASS- 2

### MATHS

#### MULTIPLE CHOICE QUESTIONS:

1. There are \_\_\_\_\_ months in a year.  
a. 12   b. 11   c. 10
2. \_\_\_\_\_ is the seventh month of the year.  
a. June   b. May   c. July
3. The difference between ₹ 55.55 and ₹ 44.44 \_\_\_\_\_  
a. 99.99   b. 11.11   c. 55.55
4.  $50 + 40 =$  \_\_\_\_\_  
a. 90   b. 80   c. 10
5. The hour hand  in the given clock is at \_\_\_\_\_  
a. 10   b. 11   c. 3

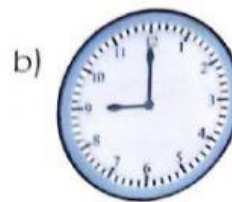
#### CHOOSE THE ACTIVITY THAT TAKES MORE TIME IN EACH OF THE FOLLOWING:

a)		<input type="text"/>		<input type="text"/>
b)		<input type="text"/>		<input type="text"/>
c)		<input type="text"/>		<input type="text"/>

**FILL IN THE BLANKS BY LOOKING AT THE CLOCK:**



I have snacks at \_\_\_\_\_ o'clock in the afternoon.



My school starts at \_\_\_\_\_ o'clock in the morning



I go to sleep at \_\_\_\_\_ o'clock at night.



I start studying at \_\_\_\_\_ o'clock in evening.

**DRAW AND DROP THE CORRECT TIME:**



\_\_\_\_\_



\_\_\_\_\_



\_\_\_\_\_

[ 5 0 'CLOCK   10 0 'CLOCK   8 0 'CLOCK ]