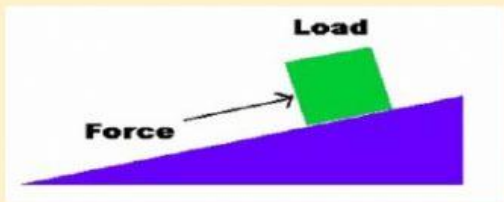
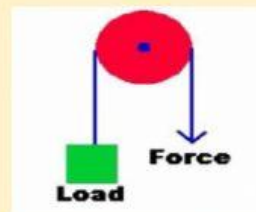


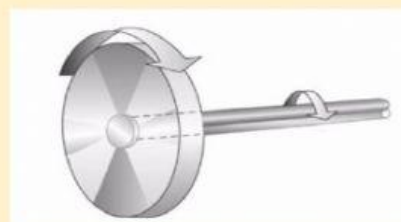
CHAPTER 7 SIMPLE MACHINES

Q:1 Identify the following simple machines.

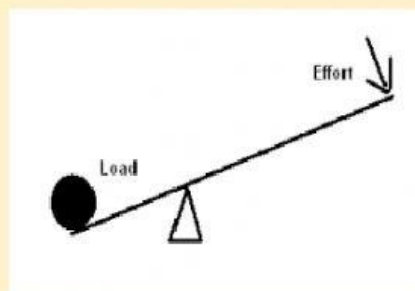












Q: 2 Write 'T' for true statements and 'F' for false statements.

(i) Major invention in the history of mankind is lever.

(ii) Inclined plane changes sliding motion into rolling motion.

(iii) Door knob is an example of wheel and axle.

(iv) Inclined plane is used to draw water out of well.