

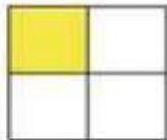
ATIVIDADE ON-LINE DE MATEMÁTICA - FRAÇÃO

NOME:

PROFESSORA ADRIANA LOPES

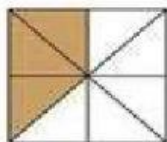
1 – LIGUE OS DESENHOS A SUA FRAÇÃO.

# FRAÇÃO




•

•  $\frac{1}{8}$



•

•  $\frac{2}{6}$



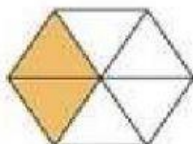
•

•  $\frac{1}{4}$



•

•  $\frac{1}{2}$



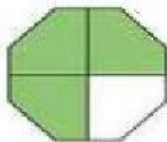
•

•  $\frac{3}{4}$



•

•  $\frac{1}{3}$



•

•  $\frac{3}{8}$



•

•  $\frac{1}{6}$