

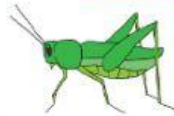
Classify the following animals according to their correct reproduction way.



Prawn



Dolphin



Grasshopper



Fish



Hippo



Snail



Monkey



Deer



Bird



Wolf

ANIMALS

Animals that lay eggs

.....

.....

.....

.....

.....

Animals that give birth

.....

.....

.....

.....

.....

The diagram below shows a type of animal.



Which of the following is the offspring of this animal?



A

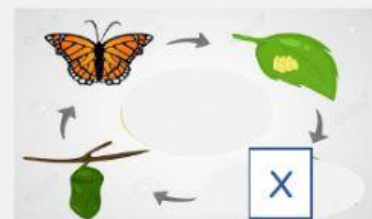


B



C

The diagram below shows the life cycle of a butterfly.



Apakah yang diwakili oleh X ?

.....

Qaisara watered her flowers every day.

Write "correct" in the correct sentence and "incorrect" in the incorrect sentence.



1. The plants will live and grow.

2. The plants will wither and die.

3. The plants get enough air.

4. The plants get sunlight.

5. The plants do not get enough water.

Hardy put the green bean seeds in the fridge.

Why the green bean seeds do not germinate ?

- A. Do not get enough water
- B. The temperature is not suitable

Which changes occur as plants grow?

- A. The circumference of the stem increases
- B. The size of the leaves is decreased

The diagram shows the changes as the plant grows.



Write the correct order for the growth of the plant.

The picture shows the activity of an animal.



What is the importance of plants to the animal?

- A. As a source of food
- B. As a habitat

Complete the questions below by naming the six types of light sources.

Torchlight

Table lamp

Sun

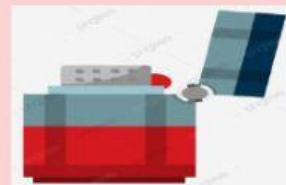
Oil lamp

Fire

Lighter



SOURCES OF LIGHT



Which of the following is not true?



Objek	Bayang-bayang
A	
B	
C	
D	

Which of the following is the importance of light to human ?



- A. Helps humans see objects clearly.
- B. Helps people to smell things.
- C. Helps humans move faster.