
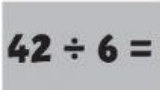












Look, read and answer.

9.00	10.00	11.00	12.00
 English	 Maths	 Art	 Science
12.30 LUNCH     			
1.30	2.30	3.00	
 PE	 History	 Music	

- What time is Maths? Maths is at ten o'clock.
- What time is PE? PE is at half past.
- What time is lunch? Lunch is at _____.
- What time is Art? Art is at _____.
- What time is Music? Music is at _____.