
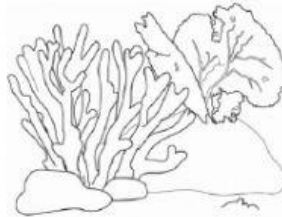
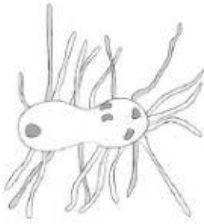




CP RAIMUNDO DE BLAS SAZ (ARROYO DE LA ENCOMIENDA-VA)



1. What groups do these living things belong to? Colour the pictures. **DRAG**



Bacteria

Algae

Animals

Fungi

Plants

2. Match the groups of living things with the definition.

a) Animals	1. They can inhabit both fresh and salt water. They can be microscopic or measure many meters long.
b) Plants	2. They do not make their own food. They live everywhere (in air, in water, in soil, on plants, on animals). They can't move about.
c) Algae	3. They can move about. They can't produce their own food. They have to eat other living thing organism.
d) Fungi	4. They use the energy from the Sun, water and minerals from the soil and carbon dioxide from the air to produce their own food. They can't move about.
e) Bacteria	5. They are the simplest of creatures that are considered alive. They are everywhere. They are in the bread you eat, the soil that plants grow in, and even inside of you.

3. TRUE OR FALSE:



a) We can eat all types of fungi. **True/False**

b) Fungi make their own food. **True/False**

c) Plants make their own food. **True/False**



d) Animals can move about. They can't produce their own food. They have to eat other living thing organism. **True/False**

e) Plants are the simplest of creatures that are considered alive. **True/False**



4. CHOSE THE CORRECT OPTION (algae, plants or both).

a) They make their own food. **ALGAE / PLANT / BOTH**

b) They cannot move about. **ALGAE / PLANT / BOTH**

c) They don't have stems. **ALGAE / PLANT / BOTH**

d) Most of them can be seen with the naked eye. **ALGAE / PLANT / BOTH**

e) They don't have leaves. **ALGAE / PLANT / BOTH**

f) They only live in water. **ALGAE / PLANT / BOTH**

g) They don't have roots. **ALGAE / PLANT / BOTH**



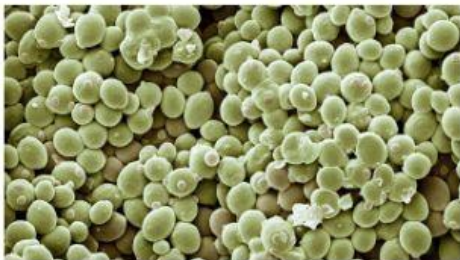
5. Match the picture or the sentence with the correct type of fungi.



MUSHROOM



YEAST



MOULDS

* These grow on some types of decaying food.



MUSHROOM

* Many of them have an umbrella shape.



YEAST

* These can only be seen with a microscope.



MOULDS

6. Complete with a suitable word



- A) Bacteria can be found
- B) They are the and
living things.
- C) You need a to observe them.
- D) Some bacteria make
- E) Other bacteria on other
- F) Some bacteria live other living things.
- G) Some of these bacteria help the organism to well.
- H) Other bacteria can cause
- I) Some bacteria are very
- J) We use bacteria to make y....., v..... and
m.....

