


JOGO DA ÁREA

**INICIAR**





**CALCULE A ÁREA**



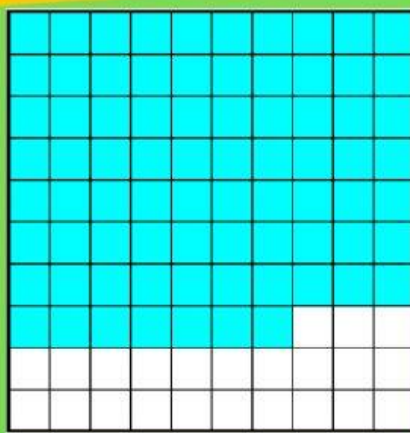
**A**  $50\text{cm}^2$

**B**  $39\text{cm}^2$

**C**  $61\text{cm}^2$



**CALCULE A ÁREA**




**A**  $77\text{cm}^2$

**B**  $23\text{cm}^2$

**C**  $45\text{cm}^2$



**CALCULE A ÁREA**



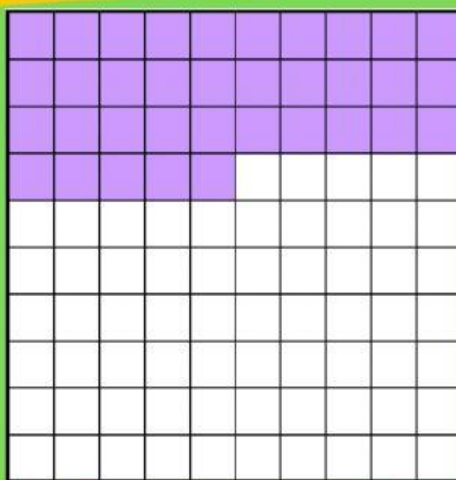
**A**  $46\text{cm}^2$

**B**  $76\text{cm}^2$

**C**  $54\text{cm}^2$



**CALCULE A ÁREA**



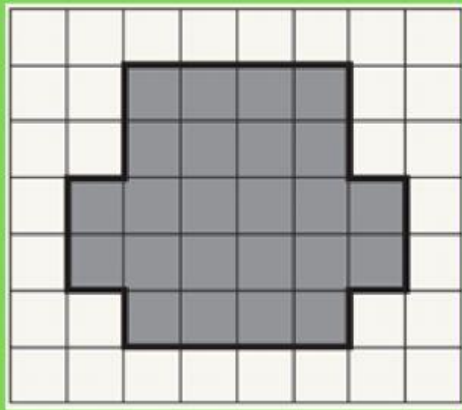
**A**  $65\text{cm}^2$

**B**  $35\text{cm}^2$

**C**  $22\text{cm}^2$



**CALCULE A ÁREA**



**A**  $56\text{cm}^2$

**B**  $12\text{cm}^2$

**C**  $24\text{cm}^2$



**PARABÉNS**

**VOCÊ É INCRÍVEL!**

