


|                           |  |                    |
|---------------------------|--|--------------------|
| Name : _____              | <br><b>Department of Math</b> | Subject : Geometry |
| Date : ____/____/2020     |  | Class : Grade 7    |
| Teacher : Alaa Hattab     |  | Duration :         |
| Lesson : Measuring angles |  | Score :            |

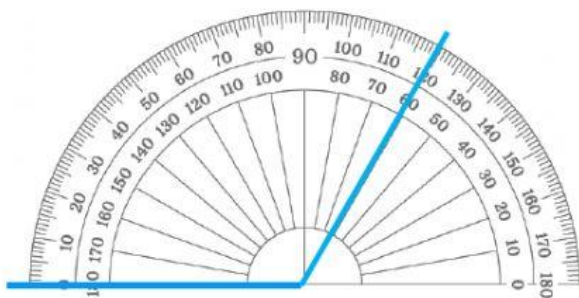
**Watch the video:**



### Measure of an angle

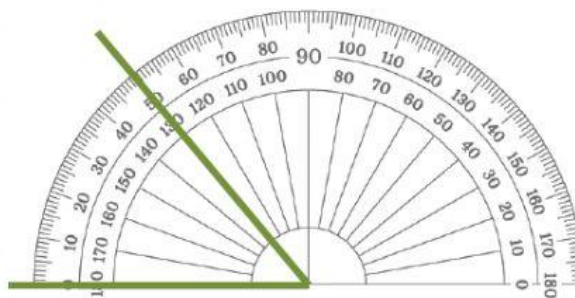
Use the **protractor** to determine the measure of each angle.

1)



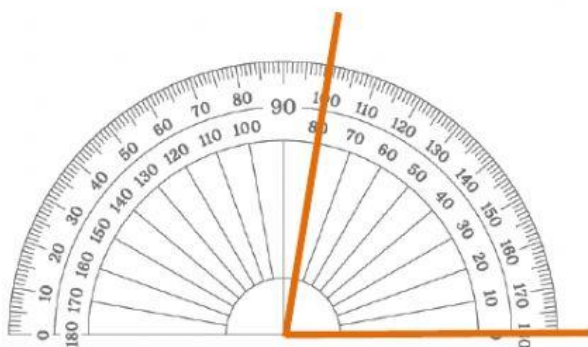
The measure of the angle is:

2)



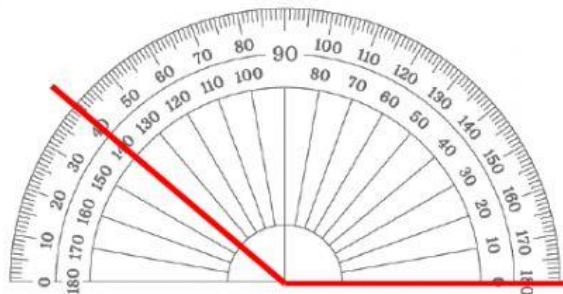
The measure of the angle is:

3)



The measure of the angle is:

4)



The measure of the angle is: