

Name: _____









Section: _____

Date: _____

Score: _____

Identifies the name of the road sign.

Chose the box with the correct object name.

	<div>stop</div> <div>turn to left</div>		<div>steep decent</div> <div>return street</div>
	<div>road work</div> <div>turn de right</div>		<div>bicycle traffic signs</div> <div>ruler</div>
	<div>traffic light</div> <div>house</div>		<div>left curve</div> <div>cross</div>
	<div>double bend</div> <div>ring</div>		<div>stop</div> <div>eraser</div>