

Sybil strachan Primary School
Christmas Term Examinations 2020
Mathematics - Computation
Grade One Readiness

Section A

Add: Count and type how many altogether.

[1pt]

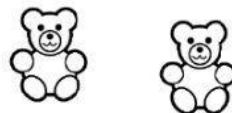



2

+

1

= _____

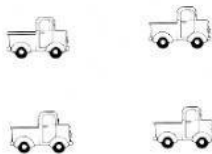


2

+

2

= _____



4

+

1

= _____



1

+

1

= _____

Section B : Addition

Add to find the sum. Type your answer.

a) $2 + 3 = \underline{\hspace{2cm}}$

c) $2 + 1 = \underline{\hspace{2cm}}$

b) $2 + 2 = \underline{\hspace{2cm}}$

d) $4 + 0 = \underline{\hspace{2cm}}$