


Comparing Lengths


Look at the three students below and answer the following questions!



Chris



Jordan



Jen

Which student is the shortest? _____.


Which student is the tallest? _____.

_____ is shorter than _____.

Look at the following items and answer the following questions.



SCISSORS



STAPLER

Which item is the longest? _____

Which Item is the shortest? _____