

Practice 15


Reminders

- The area of a flat surface is a measure of how much space is covered by that surface.
- Area is measured in square units.
- The area of a rectangle equals length times width.


$$A = l \times w$$

Directions: Compute the number of square centimeters in these figures.


1. ____ cm²



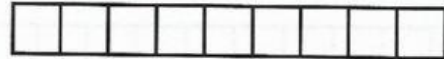
6. ____ cm²




2. ____ cm²



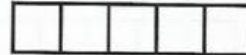
7. ____ cm²




3. ____ cm²




8. ____ cm²




4. ____ cm²



9. ____ cm²



5. ____ cm²



10. ____ cm²

