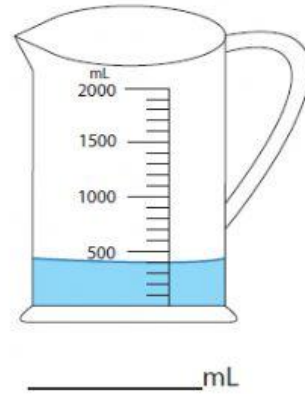


1) If you add 200 mL of water in each jug, what would be the new reading?

a)

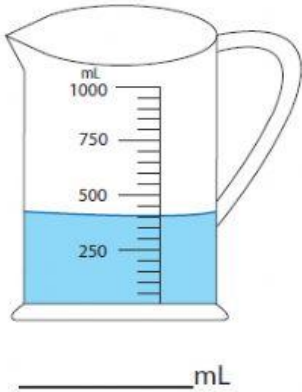


b)

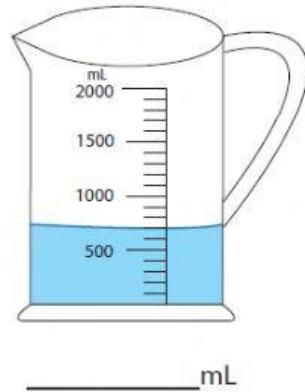


2) How much water required to fill each jug up to 800 mL?

a)



b)



3) How much water should you pour out from each jug to drop down the water level to 300 mL?

a)



b)

