


Solve the addition problems. Use the pictures for help.




$$5 + 4 =$$



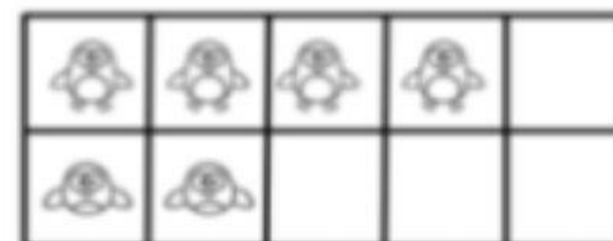
$$4 + 4 =$$



$$5 + 3 =$$



$$3 + 3 =$$



$$4 + 2 =$$



$$4 + 1 =$$