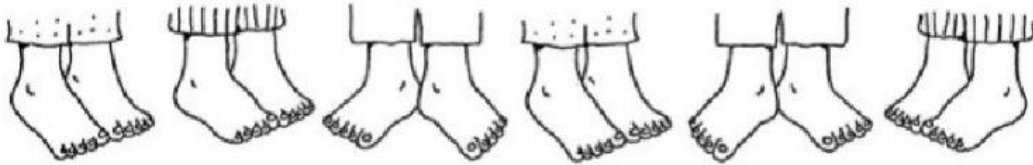


Name _____

Date _____

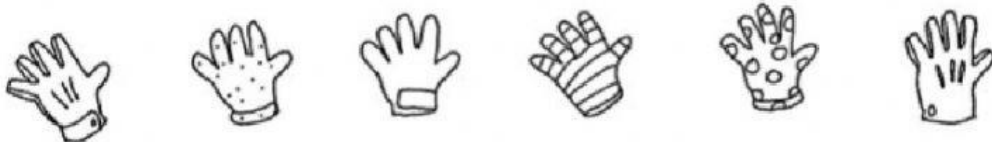
Counting by 2s, 5s, and 10s (TEST)

Count by 10's. Record the numerals.



10 20 30 _____

Count by 5's. Record the numerals.



5 10 15 _____

Count by 2's. Record the numerals.







2 4 6 _____

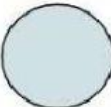

Name _____

Date _____

Fill in the missing numbers below, counting by 2s:

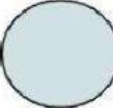
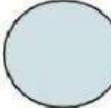
1) **2** **4**  **8**  **12**

2) **12** **14** **16**   **22**

3) **26** **28**  **32** **34** 

4) **40**  **44**  **48** **50**

Fill in the missing numbers below, counting by 5s:

1) **5** **10** **15**  **25** 

2) **15** **20** **25**   **40**

3) **25** **30** **35**   
