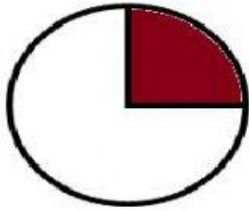


# KENDRIYA VIDYALAYA VEHICLE FACTORY JABALPUR

## WORKSHEET

Q. Select the correct fraction of shaded parts.

1.




- a.  $\frac{1}{2}$  ☐
- b.  $\frac{3}{4}$  ☐
- c.  $\frac{1}{4}$  ☐
- d. none of the above ☐

2.



- a.  $\frac{1}{2}$  ☐
- b.  $\frac{3}{4}$  ☐
- c.  $\frac{3}{6}$  ☐
- d. none of the above ☐

3.



- a.  $\frac{1}{2}$  ☐
- b.  $\frac{1}{4}$  ☐
- c.  $\frac{2}{4}$  ☐
- d. none of the above ☐

4.



a.  $\frac{1}{2}$

☐

b.  $\frac{1}{4}$

☐


c.  $\frac{3}{4}$

☐

d. none of the above

☐

5.



a.  $\frac{1}{2}$

☐

b.  $\frac{1}{4}$

☐

c.  $\frac{4}{8}$

☐

d. none of the above

☐