



Al Sela School, Al Dhafra

Math Revision

Term 1

Grade 1



Name:Grade: 1/.....



MATH REVISION

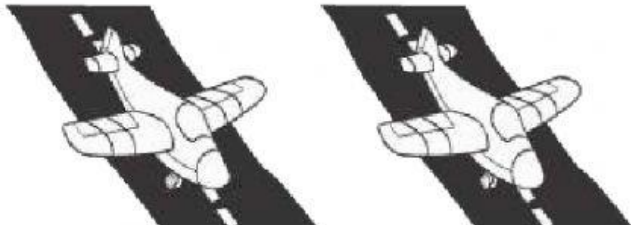
The number 5 shows that there are 5 trucks.



5

Write how many.

1.  _____

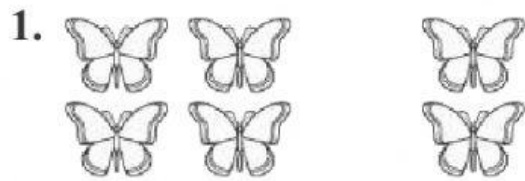
2.  _____

3.  _____

4.  _____

5.  _____

Write an addition number sentence.




_____ ○ _____ ○ _____



_____ ○ _____ ○ _____

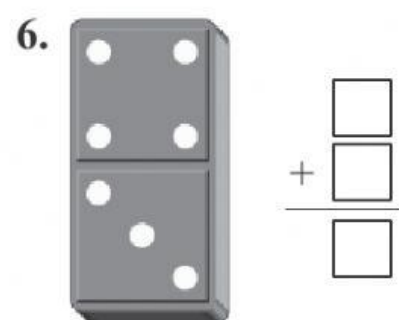
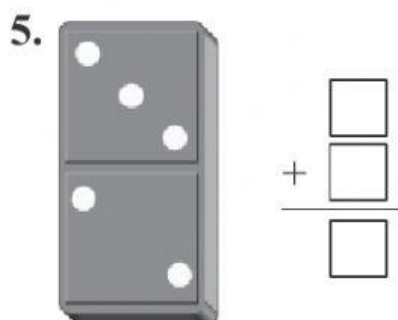


_____ ○ _____ ○ _____



_____ ○ _____ ○ _____

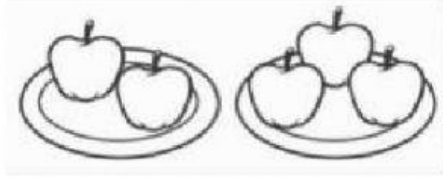
Write the numbers. Add.



Chapter 1 Review

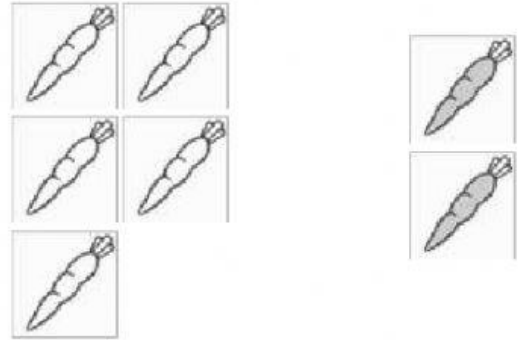
Circle the correct answer.

1. How many apples in all?



- A. 5
- B. 6
- C. 3

2. Which addition number sentence goes with the pic



- A. $5 + 2 = 3$
- B. $5 + 3 = 8$
- C. $5 + 2 = 7$

3. $2 + 3 =$

- A. 4
- B. 5
- C. 8

4. Determine if the statement is true or false.

$$1 + 6 = 6$$

- A. true
- B. false

Name _____

Chapter 1 Review *(continued)*

5.
$$\begin{array}{r} 7 \\ + 2 \\ \hline \end{array}$$

- A. 9
- B. 5
- C. 4

6.
$$\begin{array}{r} 8 \\ + 2 \\ \hline \end{array}$$

- A. 2
- B. 8
- C. 10

7. Add the two parts.

Part	Part
5	1
Whole	
<hr/>	

- A. 2
- B. 5
- C. 6

8. What is the sum?



$3 + 0 = \underline{\hspace{2cm}}$


- A. 0
- B. 3
- C. 5

Write how many.

1.



2.



Draw dots to show how many.

3. 7

4. 3

5. Put an X on 2 ducks. Write how many are left.



6. Put an X on 4 bugs. Write how many are left.



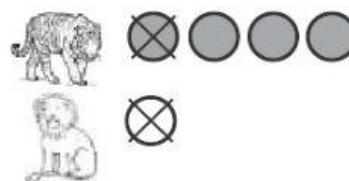
Chapter 2 Review

1. Ann has 6 buckets. 5 have sand in them. How many buckets are empty?



- A. 1 B. 6 C. 7

2. There are 4 tigers. There is 1 lion. How many fewer lions are there than tigers?



- A. $3 - 2 = 1$ fewer lion
B. $4 - 1 = 3$ fewer lions
C. $4 - 2 = 2$ fewer lions

3. Look at the addition number sentence below. Which of the following shows a related subtraction fact?

$$1 + 7 = 8$$

- A. $8 - 7 = 1$ B. $7 - 1 = 6$ C. $8 + 1 = 9$

4. What is the difference?

Part	Part
4	
Whole	
6	

- A. 10
B. 3
C. 2

Chapter 2 Review *(continued)*

Circle the correct answer.

5. $10 - 0 =$

- A. 1
- B. 9
- C. 10

6. $4 - 3 =$

- A. 1
- B. 0
- C. 2

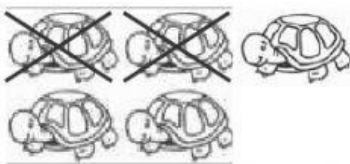
7. $\begin{array}{r} 8 \\ -8 \\ \hline \end{array}$

- A. 0
- B. 7
- C. 1

8. $\begin{array}{r} 9 \\ -4 \\ \hline \end{array}$


- A. 6
- B. 4
- C. 5

9. Which subtraction number sentence goes with the picture?



- A. $5 - 0 = 5$
- B. $5 - 2 = 3$
- C. $3 - 2 = 1$

10. Which subtraction number sentence goes with the picture?



- A. $7 - 1 = 6$
- B. $6 - 1 = 5$
- C. $6 + 1 = 7$

Add

1. $5 + 1 =$ _____

2. $6 + 4 =$ _____

3. $5 + 3 =$ _____

4. $9 + 1 =$ _____

5. $2 + 7 =$ _____

6. $4 + 4 =$ _____

7. $5 + 0 =$ _____

8. $9 + 3 =$ _____

9. $3 + 3 =$ _____

Use the pictures to write an addition number sentence.



_____ ○ _____ ○ _____