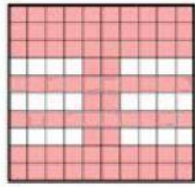


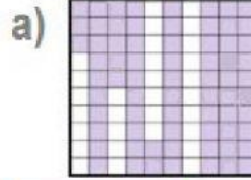
Porcentagem

Escreva a fração, o número decimal e a porcentagem correspondente a cada parte pintada das figuras:

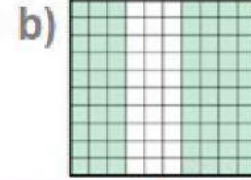


exemplo

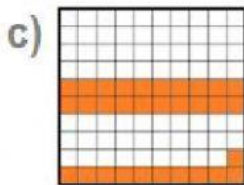
$$\frac{76}{100} = 0,76 = 76\%$$



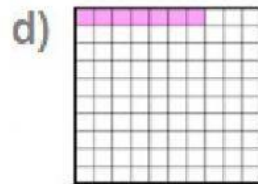
$$\frac{\quad}{\quad} = \quad = \quad \%$$



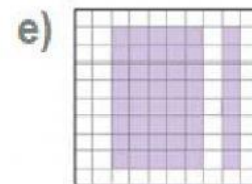
$$\frac{\quad}{\quad} = \quad = \quad \%$$



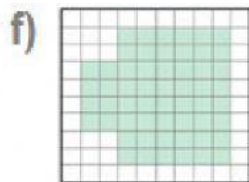
$$\frac{\quad}{\quad} = \quad = \quad \%$$



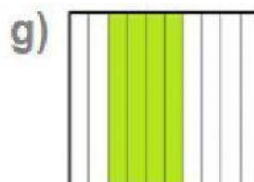
$$\frac{\quad}{\quad} = \quad = \quad \%$$



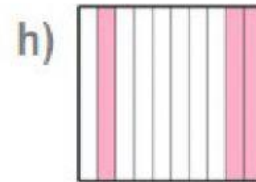
$$\frac{\quad}{\quad} = \quad = \quad \%$$




$$\frac{\quad}{\quad} = \quad = \quad \%$$



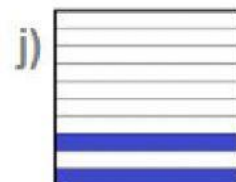
$$\frac{\quad}{\quad} = \quad = \quad \%$$



$$\frac{\quad}{\quad} = \quad = \quad \%$$



$$\frac{\quad}{\quad} = \quad = \quad \%$$



$$\frac{\quad}{\quad} = \quad = \quad \%$$



$$\frac{\quad}{\quad} = \quad = \quad \%$$