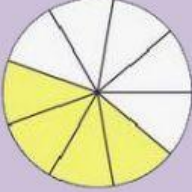
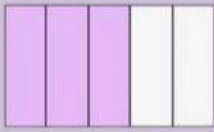
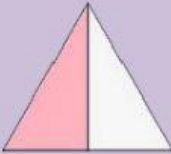
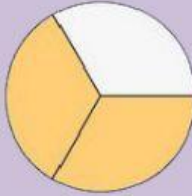
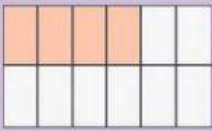
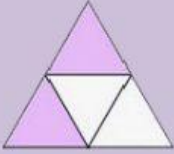
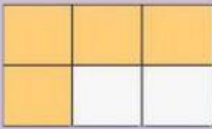
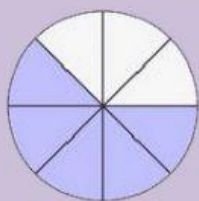


Les fractions


Reliez selon le modèle

	$\frac{3}{5}$	Deux tiers
	$\frac{4}{12}$	Un demi
	$\frac{2}{3}$	Trois cinquièmes
	$\frac{4}{9}$	Quatre douzièmes
	$\frac{1}{2}$	Quatre sixièmes
	$\frac{2}{4}$	Quatre neuvièmes
	$\frac{4}{6}$	Deux quatrièmes



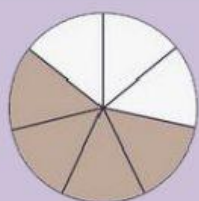
$$\frac{5}{10}$$

Cinq
dixièmes



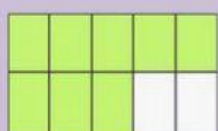
$$\frac{1}{3}$$

Un
tiers



$$\frac{2}{6}$$

Un
tiers



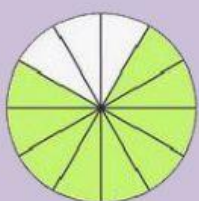
$$\frac{5}{8}$$

Cinq
huitièmes




$$\frac{4}{9}$$

Quatre
neufièmes



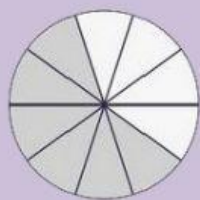
$$\frac{6}{12}$$

Six
dixièmes



$$\frac{10}{14}$$

Dix
quatorzièmes



$$\frac{6}{10}$$

Six
dixièmes