





Name \_\_\_\_\_

Choose the correct fraction for each picture.



half

$$\frac{1}{2}$$

half

$$\frac{1}{2}$$

half

$$\frac{1}{2}$$

one-third

$$\frac{1}{3}$$

one-third

$$\frac{1}{3}$$

one-third

$$\frac{1}{3}$$

one-fourth

$$\frac{1}{4}$$

one-fourth

$$\frac{1}{4}$$

one-fourth

$$\frac{1}{4}$$

one-fourth

$$\frac{1}{4}$$