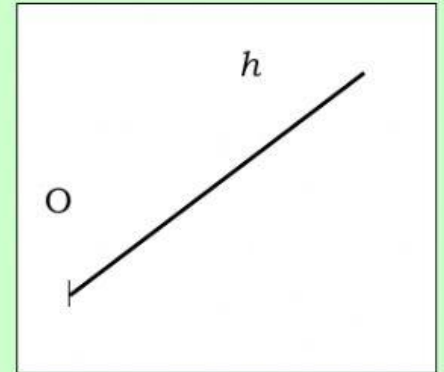
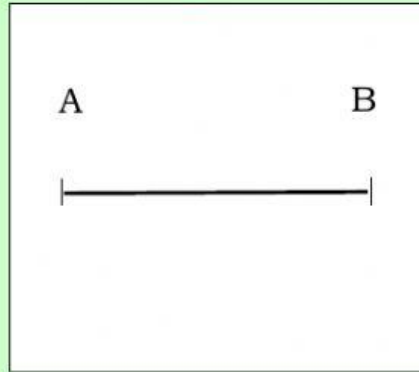
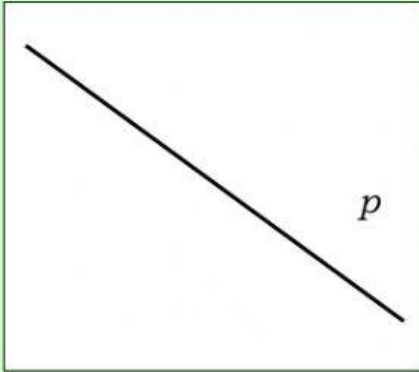


IME:

UTRJEVANJE

1. Katere črte so narisane?

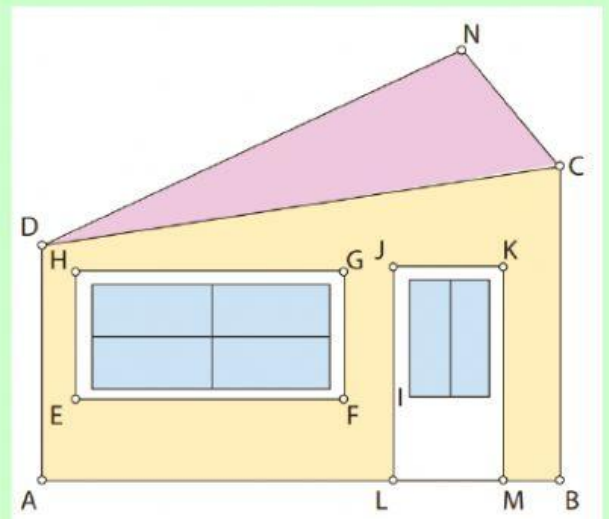


2. Oglj si sliko in odgovori na vprašanja.

- Kako se imenujejo črte na sliki, ki so označene s točkami?

- Koliko pravokotnikov vidiš?

- Streha ima obliko



3. Reši enačbe.



$$X + 21\,354 = 77\,211$$

$$X =$$

$$X =$$

$$4\,567 + X = 32\,491$$

$$X =$$

$$X =$$

$$X - 34\,212 = 12\,345$$

$$X =$$

$$X =$$

$$X - 8\,943 = 3\,987$$

$$X =$$

$$X =$$

$$56\,215 - X = 3\,244$$

$$X =$$

$$X =$$

$$13\,879 - X = 234$$

$$X =$$

$$X =$$