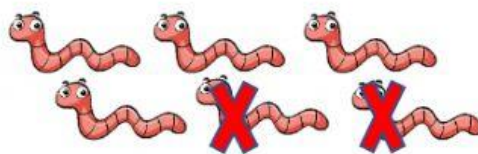


Resta. Halla la diferencia.




$$\begin{array}{r} 6 \\ - 4 \\ \hline \square \end{array}$$




$$\begin{array}{r} 6 \\ - 2 \\ \hline \square \end{array}$$




$$\begin{array}{r} 4 \\ - 1 \\ \hline \square \end{array}$$



$$\begin{array}{r} 4 \\ - 3 \\ \hline \square \end{array}$$



$$\begin{array}{r} 2 \\ - 2 \\ \hline \square \end{array}$$



$$\begin{array}{r} 6 \\ - 3 \\ \hline \square \end{array}$$