





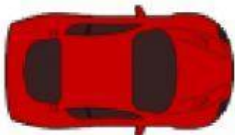




Linear Measurement: Centimetre, Metre and Kilometre

Identify the appropriate unit.

<p>Length of a calendar</p> 	<p>Length of track</p> 	<p>Distance travelled by a plane</p> 
cm / m / km	cm / m / km	cm / m / km
<p>Width of a shirt</p> 	<p>Height of a man</p> 	<p>Length of a pair of scissors</p> 
cm / m / km	cm / m / km	cm / m / km
<p>Distance travelled by a car</p> 	<p>Length of a soccer field</p> 	<p>Height of a tree</p> 
cm / m / km	cm / m / km	cm / m / km