



CHAPTER 6:

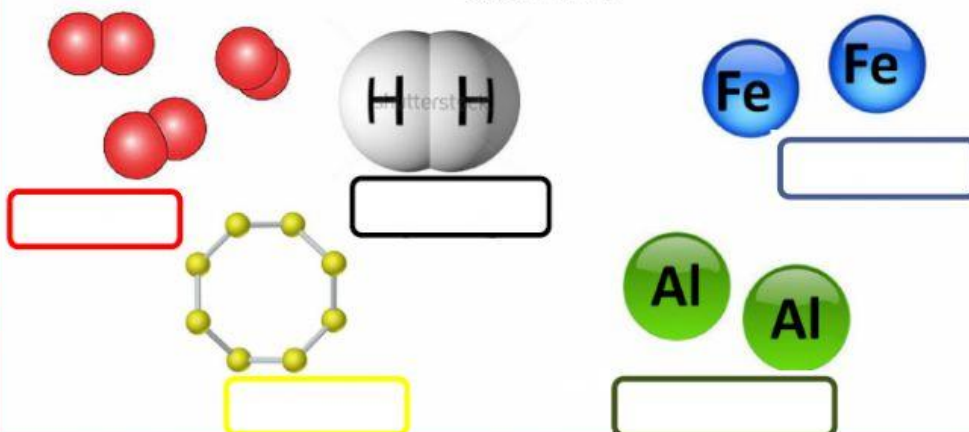


Periodic Table

A. Give the name of the following element.

ELEMENT

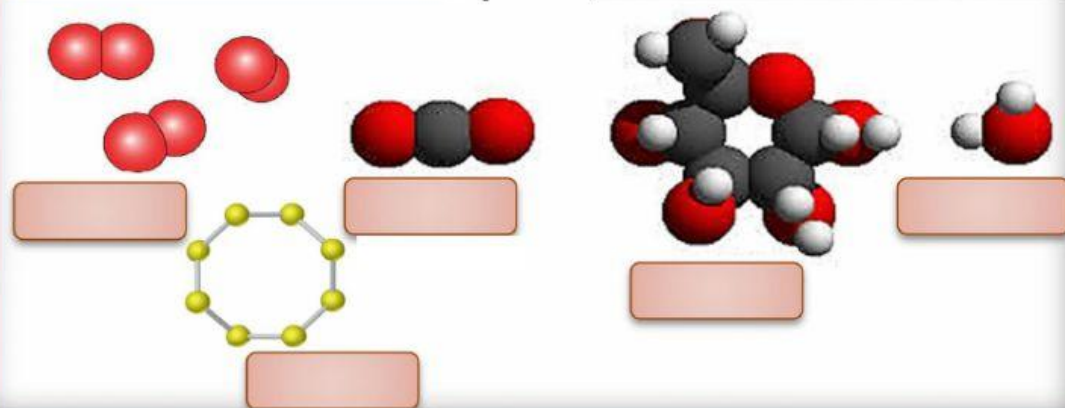
- The simplest form of substance.
- Only one type of atom in an element



B. Give the name of the following molecule.

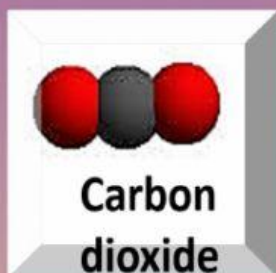
MOLECULE

Neutral particles made up of two or more atoms





c. Match the correct elements for Carbon dioxide, Glucose and Water.



- Hydrogen
- Oxygen

- Carbon
- Hydrogen
- Oxygen

- Carbon
- Oxygen

D. Complete up the table.

METAL	DIFFERENCES	NON-METAL
Good conductor	ELECTRICITY CONDUCTIVITY	Poor conductor (except carbon and silicon)
	HEAT CONDUCTIVITY	
High	DENSITY	Low
	MELTING/BOILING POINT	