



Spring Hill International School

Quiz no.7

Scholastic Year 2020/ 2021

Student's Name:

Class & Section: Grade 4

Teacher's Name: Raghda Ziad

Subject: Math / Checkpoint

Test Duration: 10 mins


Date: 17 / Nov. / 2020


No. of Questions: 3


No. of Pages: 1

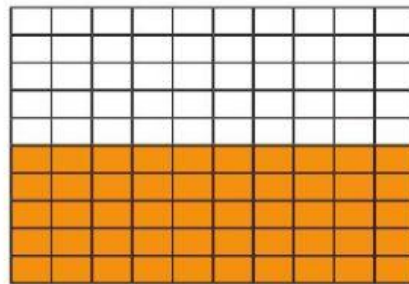
Question Number	Q.1	Q.2	Q.3	Total Mark
Student's Mark				
Question Mark	2	2	1	5

Question no.1 : Write the decimal and the fraction of each shaded area









Question no.2: Write the next two terms in each sequence

a. 0.1 / 0.2 / 0.3 / / .

b. 0.15 / 0.17 / 0.19 / / .

c. 0.8 / 0.7 / 0.6 / / .

d. 1.97 / 1.98 / 1.99 / / .

Question no.3: Write the correct decimal on the number line

