




1. Circle the sign to make this true. 24 (< > =) 38
2. What word tells <i>how many in all</i> ? sum circle
3. Lee has 2 cats and 1 dog. How many cats and dogs does he have in all? cats and dogs
4. Which one is <i>fourth</i> ? 
5. Write the number <i>ten</i> . _____
6. Count by 2's. 2, 4, 6, 8, _____
7. How much money is this?  _____ ¢
8. Does the clock show 1 o'clock?  Yes No
9. A door is _____ you. taller than shorter than
10. Write the sum. $6 + 2 =$ _____